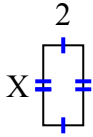




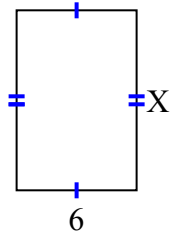
Tìm giá trị của X đối với mỗi hình. Mỗi hình tính bằng cm (cm). Không phải mở rộng quy mô.

Câu trả lời

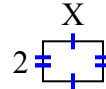
1) diện tích = 8 centimet²



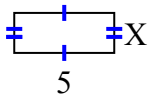
2) diện tích = 54 centimet²



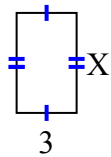
3) diện tích = 6 centimet²



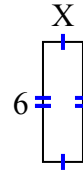
4) diện tích = 10 centimet²



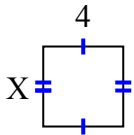
5) diện tích = 15 centimet²



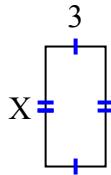
6) diện tích = 12 centimet²



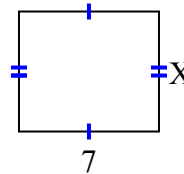
7) diện tích = 16 centimet²



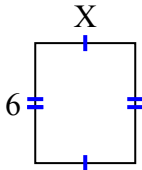
8) diện tích = 18 centimet²



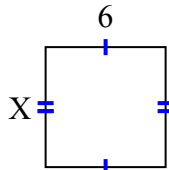
9) diện tích = 42 centimet²



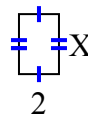
10) diện tích = 30 centimet²



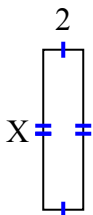
11) diện tích = 36 centimet²



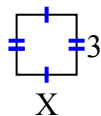
12) diện tích = 6 centimet²



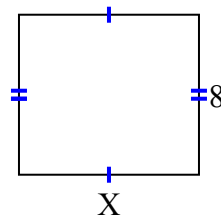
13) diện tích = 16 centimet²



14) diện tích = 9 centimet²



15) diện tích = 72 centimet²



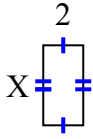
1. _____
2. _____
3. _____
4. _____
5. _____
6. _____
7. _____
8. _____
9. _____
10. _____
11. _____
12. _____
13. _____
14. _____
15. _____



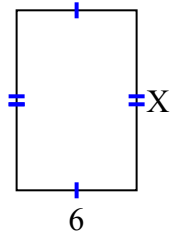
Tìm giá trị của X đối với mỗi hình. Mỗi hình tính bằng cm (cm). Không phải mở rộng quy mô.

Câu trả lời

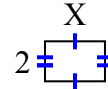
1) diện tích = 8 centimet²



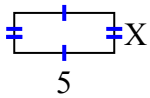
2) diện tích = 54 centimet²



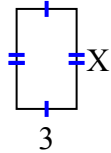
3) diện tích = 6 centimet²



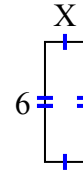
4) diện tích = 10 centimet²



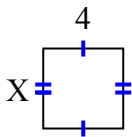
5) diện tích = 15 centimet²



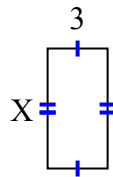
6) diện tích = 12 centimet²



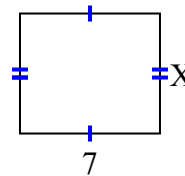
7) diện tích = 16 centimet²



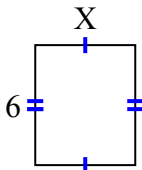
8) diện tích = 18 centimet²



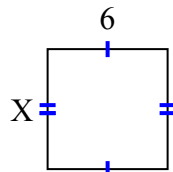
9) diện tích = 42 centimet²



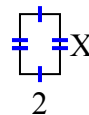
10) diện tích = 30 centimet²



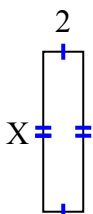
11) diện tích = 36 centimet²



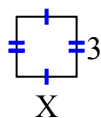
12) diện tích = 6 centimet²



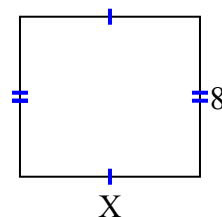
13) diện tích = 16 centimet²



14) diện tích = 9 centimet²



15) diện tích = 72 centimet²



1. 4
2. 9
3. 3
4. 2
5. 5
6. 2
7. 4
8. 6
9. 6
10. 5
11. 6
12. 3
13. 8
14. 3
15. 9