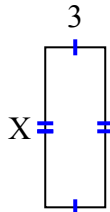




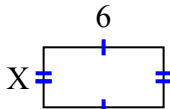
**Tìm giá trị của X đối với mỗi hình. Mỗi hình tính bằng cm (cm). Không phải mở rộng quy mô.**

**Câu trả lời**

1) diện tích = 24 centimet<sup>2</sup>



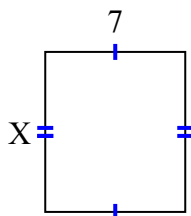
2) diện tích = 18 centimet<sup>2</sup>



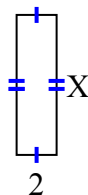
3) diện tích = 4 centimet<sup>2</sup>



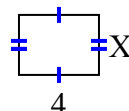
4) diện tích = 56 centimet<sup>2</sup>



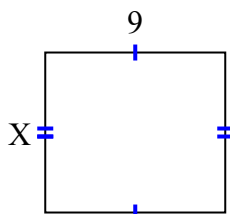
5) diện tích = 14 centimet<sup>2</sup>



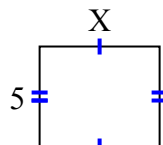
6) diện tích = 12 centimet<sup>2</sup>



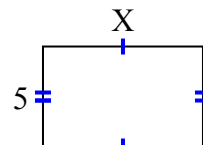
7) diện tích = 72 centimet<sup>2</sup>



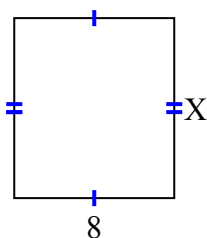
8) diện tích = 30 centimet<sup>2</sup>



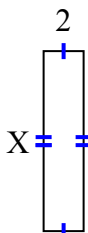
9) diện tích = 40 centimet<sup>2</sup>



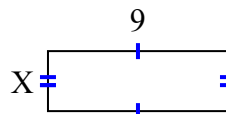
10) diện tích = 72 centimet<sup>2</sup>



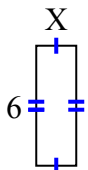
11) diện tích = 18 centimet<sup>2</sup>



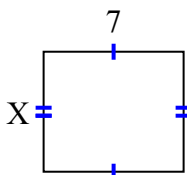
12) diện tích = 27 centimet<sup>2</sup>



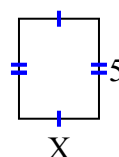
13) diện tích = 12 centimet<sup>2</sup>



14) diện tích = 42 centimet<sup>2</sup>



15) diện tích = 20 centimet<sup>2</sup>



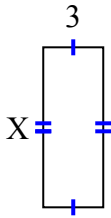
1. \_\_\_\_\_
2. \_\_\_\_\_
3. \_\_\_\_\_
4. \_\_\_\_\_
5. \_\_\_\_\_
6. \_\_\_\_\_
7. \_\_\_\_\_
8. \_\_\_\_\_
9. \_\_\_\_\_
10. \_\_\_\_\_
11. \_\_\_\_\_
12. \_\_\_\_\_
13. \_\_\_\_\_
14. \_\_\_\_\_
15. \_\_\_\_\_



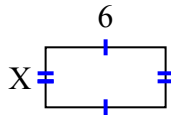
Tìm giá trị của X đối với mỗi hình. Mỗi hình tính bằng cm (cm). Không phải mở rộng quy mô.

**Câu trả lời**

1) diện tích = 24 centimet<sup>2</sup>



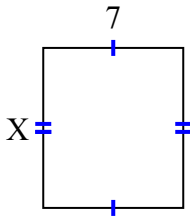
2) diện tích = 18 centimet<sup>2</sup>



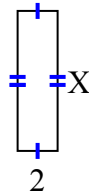
3) diện tích = 4 centimet<sup>2</sup>



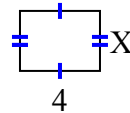
4) diện tích = 56 centimet<sup>2</sup>



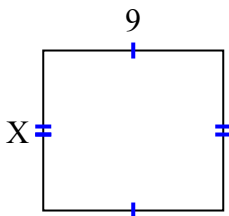
5) diện tích = 14 centimet<sup>2</sup>



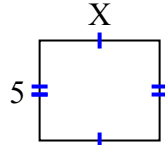
6) diện tích = 12 centimet<sup>2</sup>



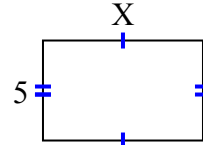
7) diện tích = 72 centimet<sup>2</sup>



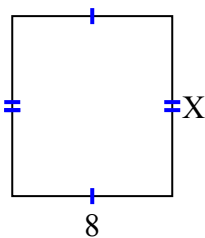
8) diện tích = 30 centimet<sup>2</sup>



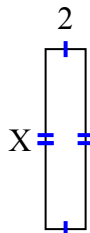
9) diện tích = 40 centimet<sup>2</sup>



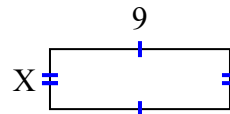
10) diện tích = 72 centimet<sup>2</sup>



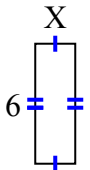
11) diện tích = 18 centimet<sup>2</sup>



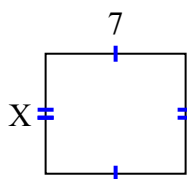
12) diện tích = 27 centimet<sup>2</sup>



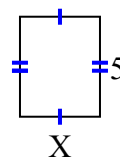
13) diện tích = 12 centimet<sup>2</sup>



14) diện tích = 42 centimet<sup>2</sup>



15) diện tích = 20 centimet<sup>2</sup>



1. 8
2. 3
3. 2
4. 8
5. 7
6. 3
7. 8
8. 6
9. 8
10. 9
11. 9
12. 3
13. 2
14. 6
15. 4