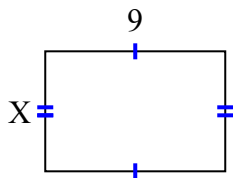




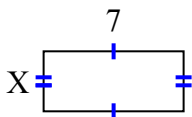
Tìm giá trị của X đối với mỗi hình. Mỗi hình tính bằng cm (cm). Không phải mở rộng quy mô.

Câu trả lời

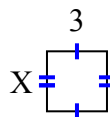
1) diện tích = 54 centimet²



2) diện tích = 21 centimet²



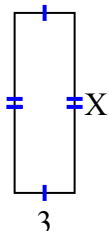
3) diện tích = 9 centimet²



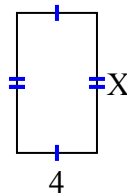
4) diện tích = 4 centimet²



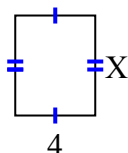
5) diện tích = 27 centimet²



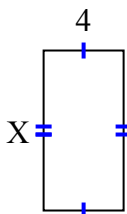
6) diện tích = 28 centimet²



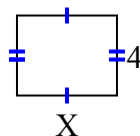
7) diện tích = 20 centimet²



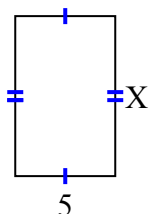
8) diện tích = 32 centimet²



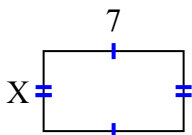
9) diện tích = 20 centimet²



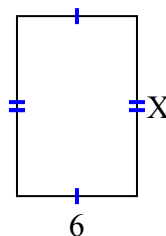
10) diện tích = 40 centimet²



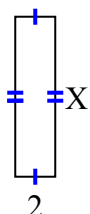
11) diện tích = 28 centimet²



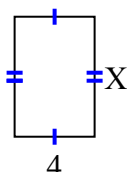
12) diện tích = 54 centimet²



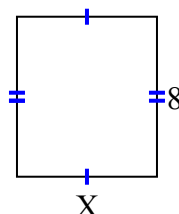
13) diện tích = 16 centimet²



14) diện tích = 24 centimet²



15) diện tích = 56 centimet²



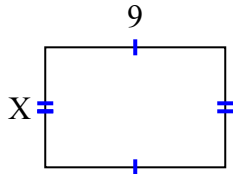
1. _____
2. _____
3. _____
4. _____
5. _____
6. _____
7. _____
8. _____
9. _____
10. _____
11. _____
12. _____
13. _____
14. _____
15. _____



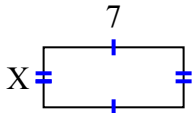
Tìm giá trị của X đối với mỗi hình. Mỗi hình tính bằng cm (cm). Không phải mở rộng quy mô.

Câu trả lời

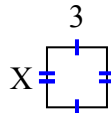
1) diện tích = 54 centimet²



2) diện tích = 21 centimet²



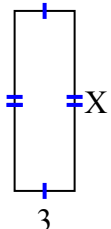
3) diện tích = 9 centimet²



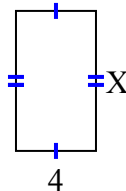
4) diện tích = 4 centimet²



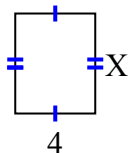
5) diện tích = 27 centimet²



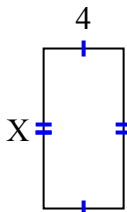
6) diện tích = 28 centimet²



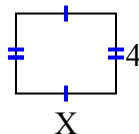
7) diện tích = 20 centimet²



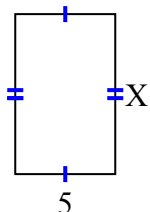
8) diện tích = 32 centimet²



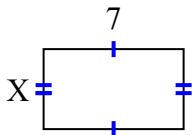
9) diện tích = 20 centimet²



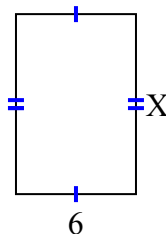
10) diện tích = 40 centimet²



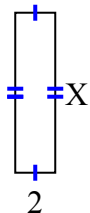
11) diện tích = 28 centimet²



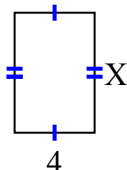
12) diện tích = 54 centimet²



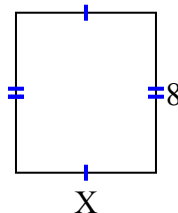
13) diện tích = 16 centimet²



14) diện tích = 24 centimet²



15) diện tích = 56 centimet²



1. 6

2. 3

3. 3

4. 2

5. 9

6. 7

7. 5

8. 8

9. 5

10. 8

11. 4

12. 9

13. 8

14. 6

15. 7