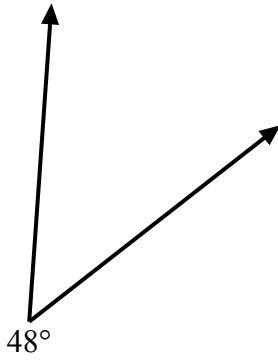




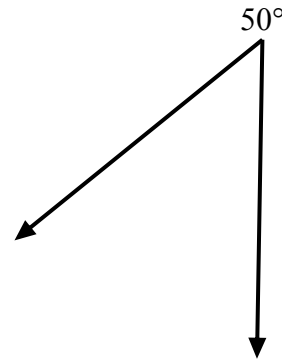
Sử dụng thước đo góc để tạo một hình tam giác từ hình bên. Trả lời với các góc còn thiếu. Các câu trả lời sẽ khác nhau.

Câu trả lời

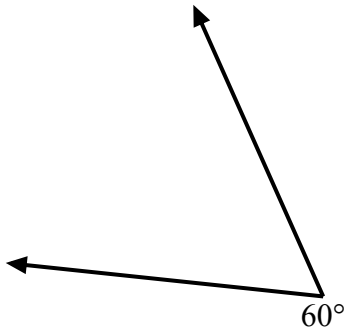
1)



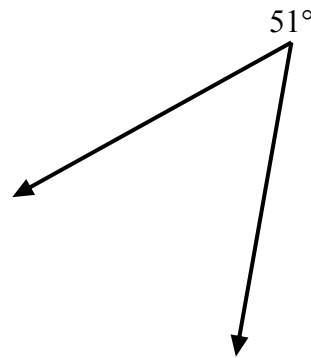
2)



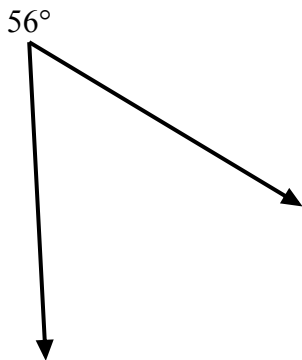
3)



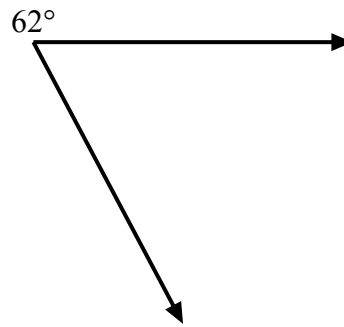
4)



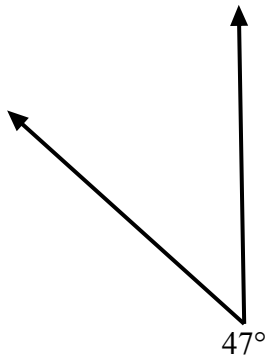
5)



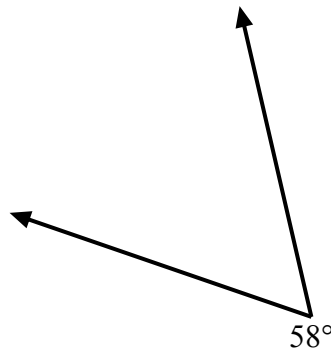
6)



7)



8)

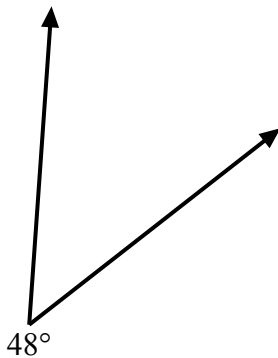


1. _____
2. _____
3. _____
4. _____
5. _____
6. _____
7. _____
8. _____

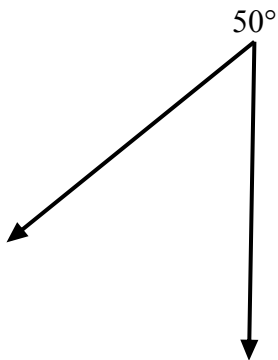


Sử dụng thước đo góc để tạo một hình tam giác từ hình bên. Trả lời với các góc còn thiếu. Các câu trả lời sẽ khác nhau.

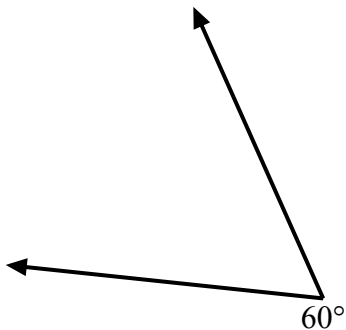
1)



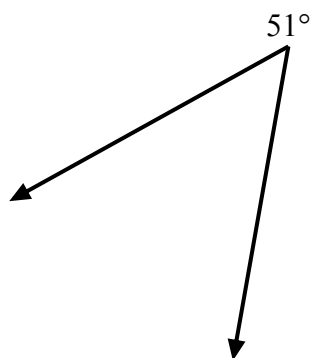
2)



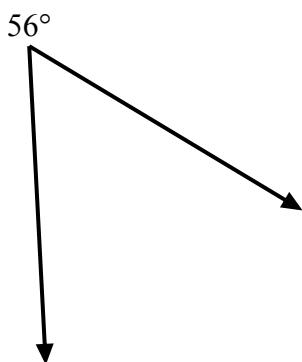
3)



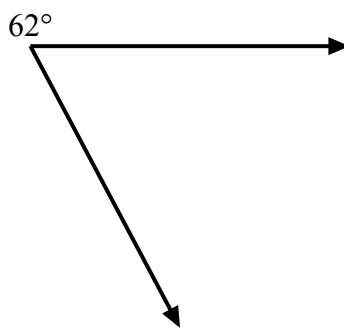
4)



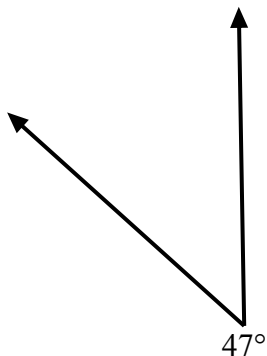
5)



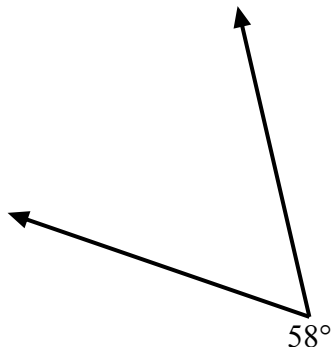
6)



7)



8)



Câu trả lời

1. =132
2. =130
3. =120
4. =129
5. =124
6. =118
7. =133
8. =122