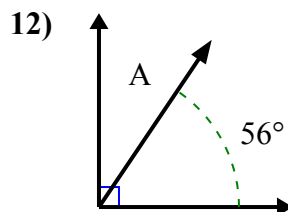
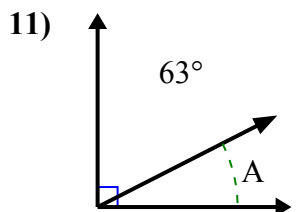
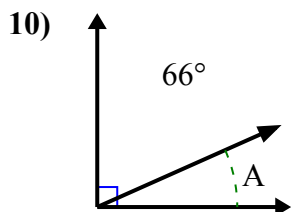
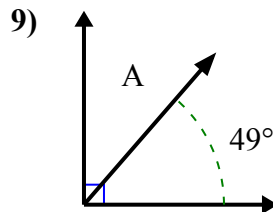
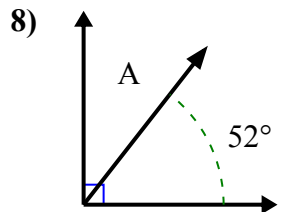
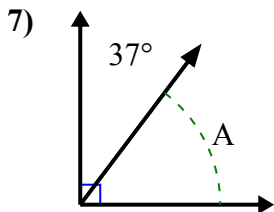
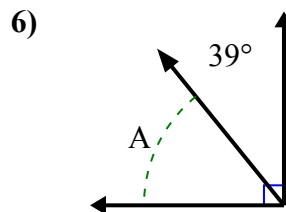
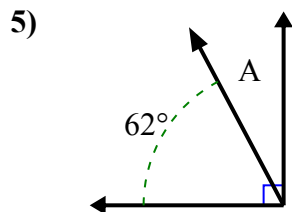
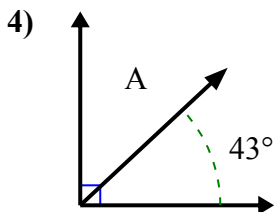
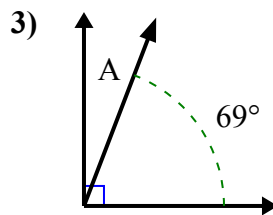
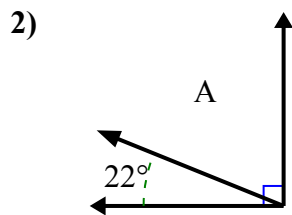
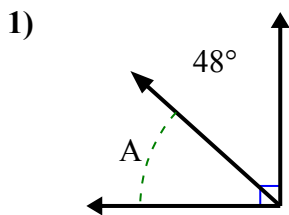




Tìm giá trị của 'A' trong tập hợp các góc bù nhau.

Câu trả lời

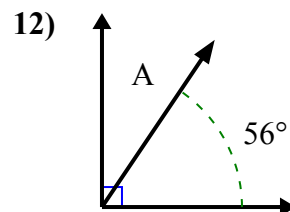
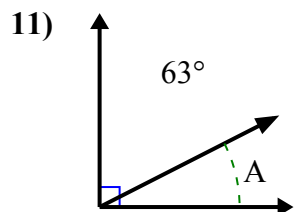
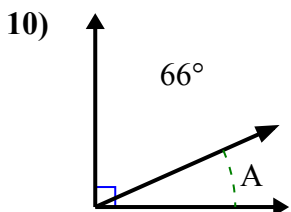
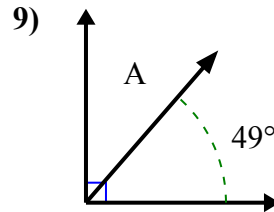
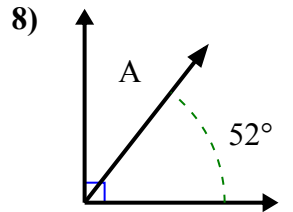
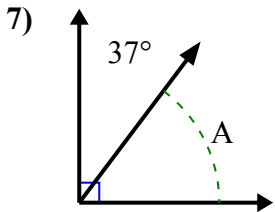
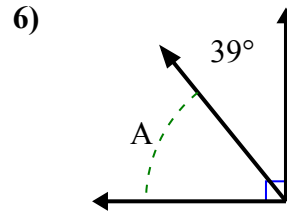
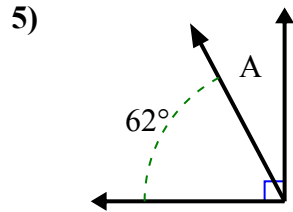
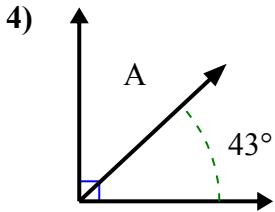
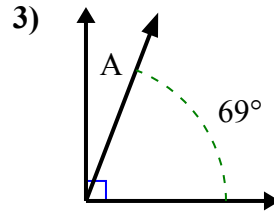
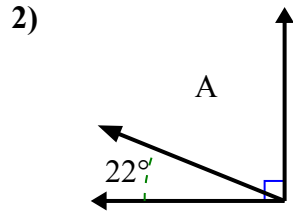
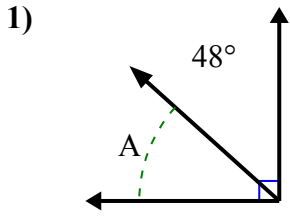


1. _____
2. _____
3. _____
4. _____
5. _____
6. _____
7. _____
8. _____
9. _____
10. _____
11. _____
12. _____



Tìm giá trị của 'A' trong tập hợp các góc bù nhau.

Câu trả lời



1. **42°**

2. **68°**

3. **21°**

4. **47°**

5. **28°**

6. **51°**

7. **53°**

8. **38°**

9. **41°**

10. **24°**

11. **27°**

12. **34°**