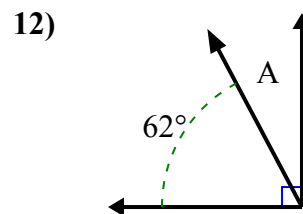
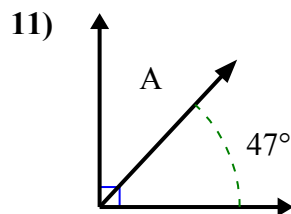
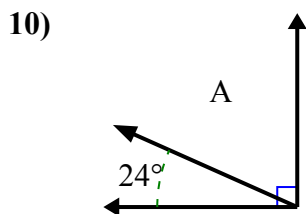
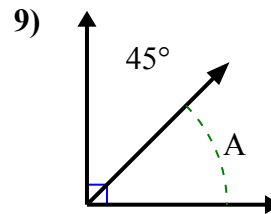
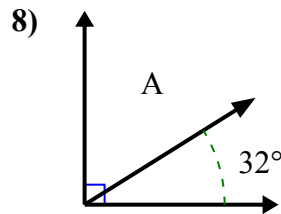
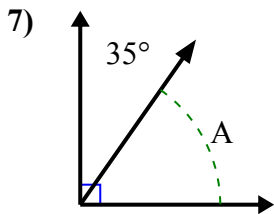
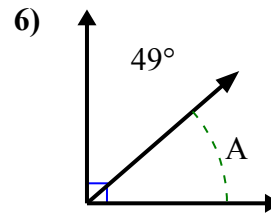
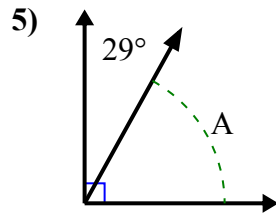
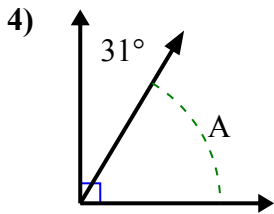
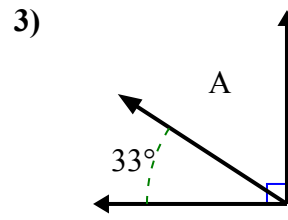
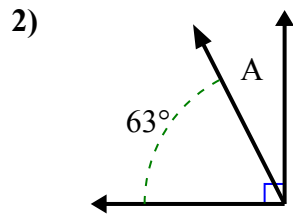
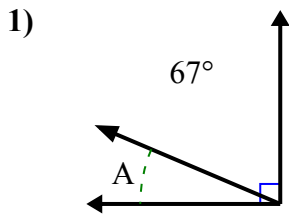




Tìm giá trị của 'A' trong tập hợp các góc bù nhau.

**Câu trả lời**

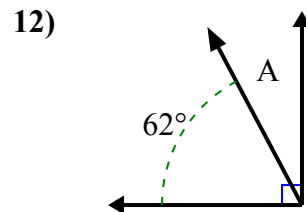
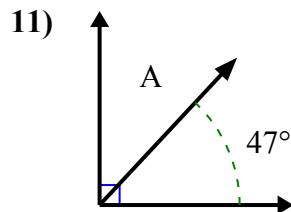
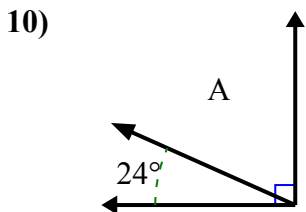
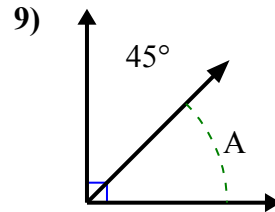
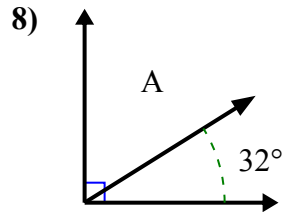
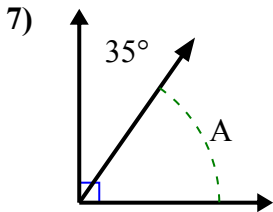
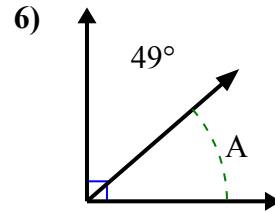
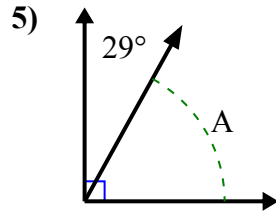
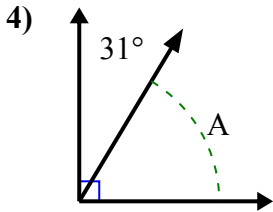
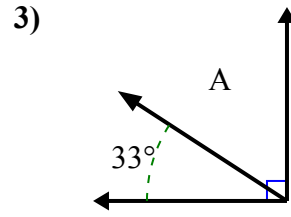
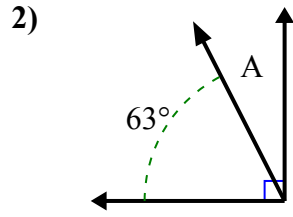
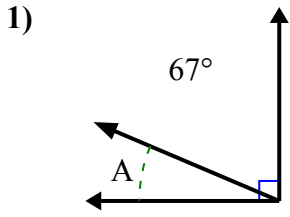


1. \_\_\_\_\_
2. \_\_\_\_\_
3. \_\_\_\_\_
4. \_\_\_\_\_
5. \_\_\_\_\_
6. \_\_\_\_\_
7. \_\_\_\_\_
8. \_\_\_\_\_
9. \_\_\_\_\_
10. \_\_\_\_\_
11. \_\_\_\_\_
12. \_\_\_\_\_



Tìm giá trị của 'A' trong tập hợp các góc bù nhau.

**Câu trả lời**



1. **23°**

2. **27°**

3. **57°**

4. **59°**

5. **61°**

6. **41°**

7. **55°**

8. **58°**

9. **45°**

10. **66°**

11. **43°**

12. **28°**