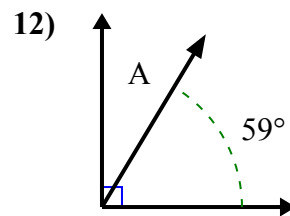
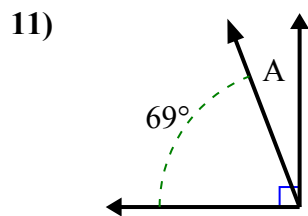
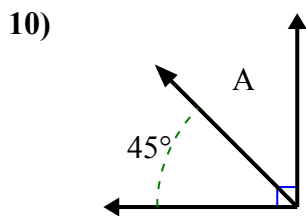
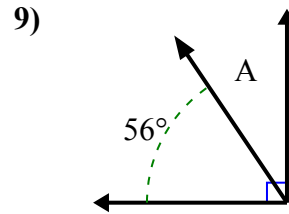
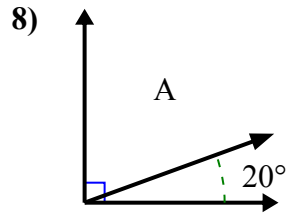
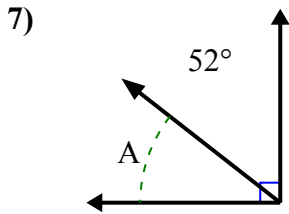
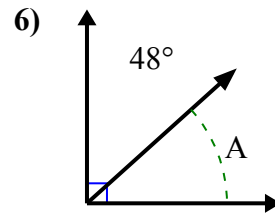
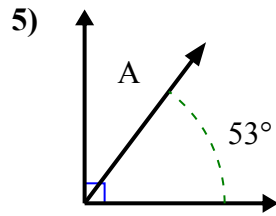
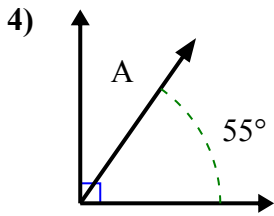
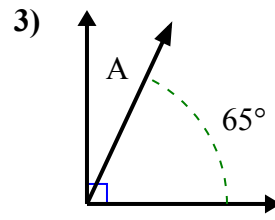
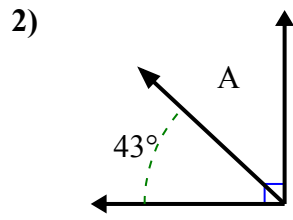
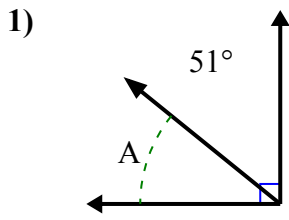




Tìm giá trị của 'A' trong tập hợp các góc bù nhau.

Câu trả lời

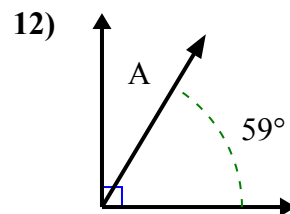
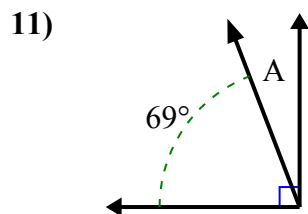
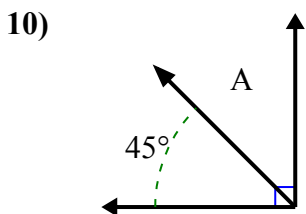
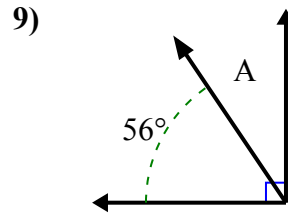
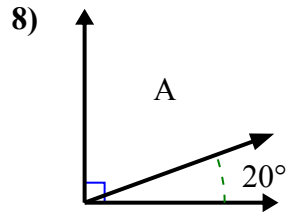
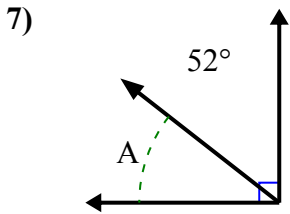
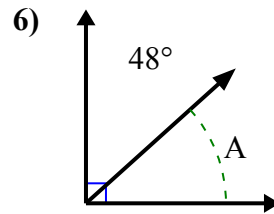
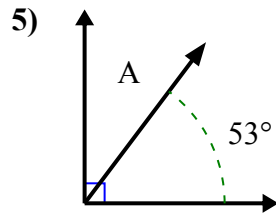
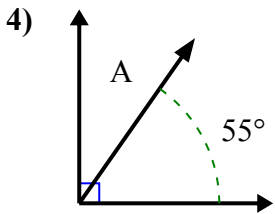
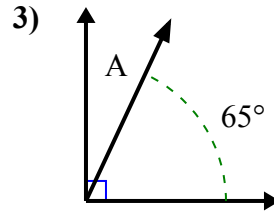
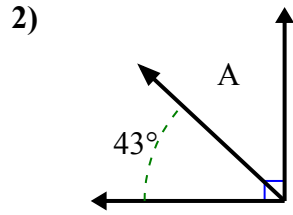
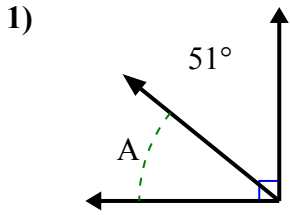


1. _____
2. _____
3. _____
4. _____
5. _____
6. _____
7. _____
8. _____
9. _____
10. _____
11. _____
12. _____



Tìm giá trị của 'A' trong tập hợp các góc bù nhau.

Câu trả lời



1. **39°**

2. **47°**

3. **25°**

4. **35°**

5. **37°**

6. **42°**

7. **38°**

8. **70°**

9. **34°**

10. **45°**

11. **21°**

12. **31°**