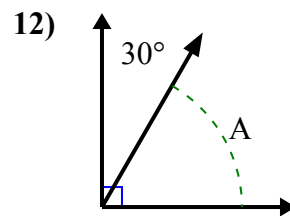
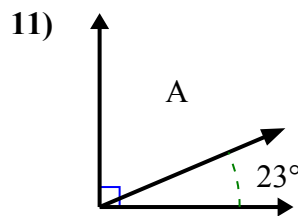
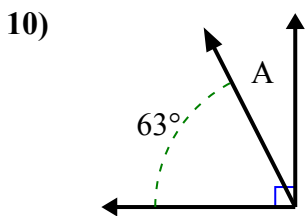
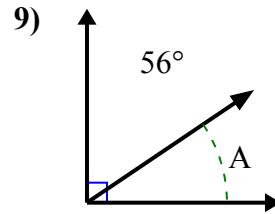
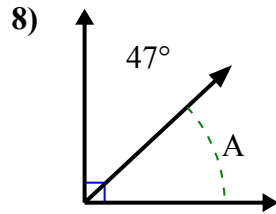
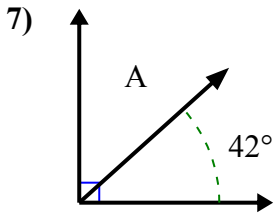
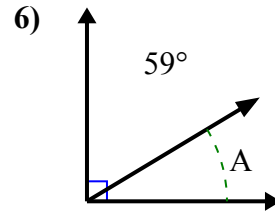
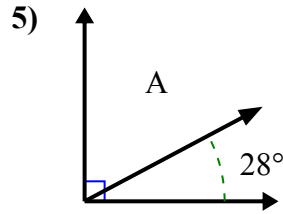
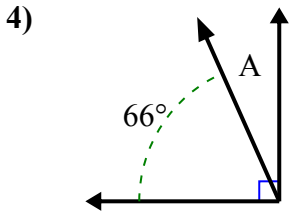
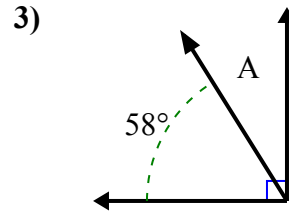
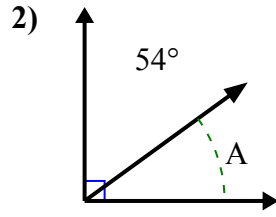
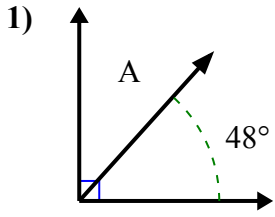




Tìm giá trị của 'A' trong tập hợp các góc bù nhau.

**Câu trả lời**

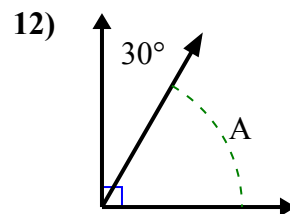
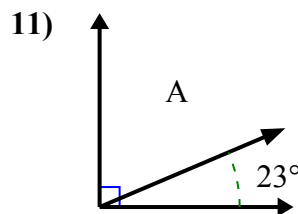
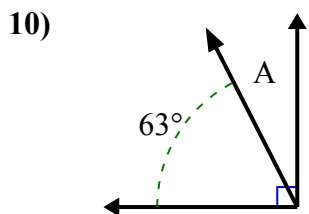
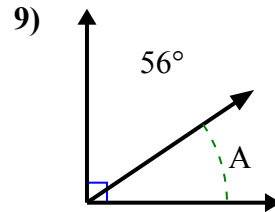
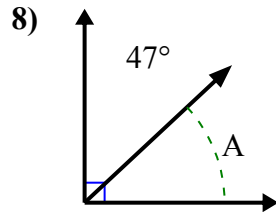
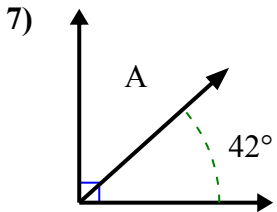
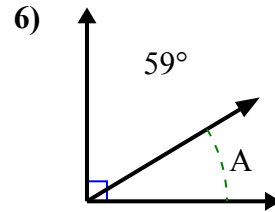
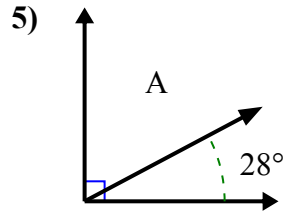
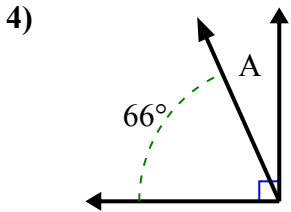
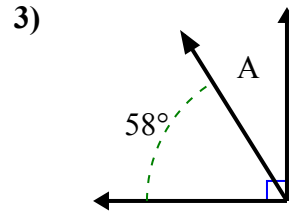
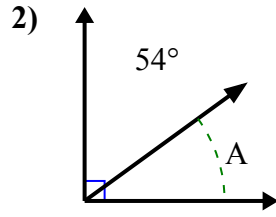
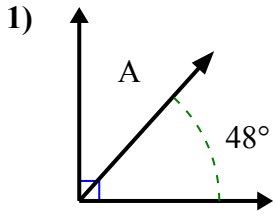


1. \_\_\_\_\_
2. \_\_\_\_\_
3. \_\_\_\_\_
4. \_\_\_\_\_
5. \_\_\_\_\_
6. \_\_\_\_\_
7. \_\_\_\_\_
8. \_\_\_\_\_
9. \_\_\_\_\_
10. \_\_\_\_\_
11. \_\_\_\_\_
12. \_\_\_\_\_



Tìm giá trị của 'A' trong tập hợp các góc bù nhau.

**Câu trả lời**



1. **42°**

2. **36°**

3. **32°**

4. **24°**

5. **62°**

6. **31°**

7. **48°**

8. **43°**

9. **34°**

10. **27°**

11. **67°**

12. **60°**