



Giải các câu hỏi.

Câu trả lời

1) $4 + 1 = \underline{\quad}$

2) $4 + 0 = \underline{\quad}$

3) $3 + 2 = \underline{\quad}$

4) $2 + 1 = \underline{\quad}$

5) $1 + 2 = \underline{\quad}$

6) $1 + 3 = \underline{\quad}$

7) $3 + 0 = \underline{\quad}$

8) $5 + 0 = \underline{\quad}$

9) $5 - 5 = \underline{\quad}$

10) $3 - 2 = \underline{\quad}$

11) $4 - 1 = \underline{\quad}$

12) $1 - 1 = \underline{\quad}$

13) $3 - 3 = \underline{\quad}$

14) $5 - 1 = \underline{\quad}$

15) $5 - 2 = \underline{\quad}$

16) $5 - 4 = \underline{\quad}$

1. _____

2. _____

3. _____

4. _____

5. _____

6. _____

7. _____

8. _____

9. _____

10. _____

11. _____

12. _____

13. _____

14. _____

15. _____

16. _____



Giải các câu hỏi.

1) $4 + 1 = \underline{5}$

2) $4 + 0 = \underline{4}$

3) $3 + 2 = \underline{5}$

4) $2 + 1 = \underline{3}$

5) $1 + 2 = \underline{3}$

6) $1 + 3 = \underline{4}$

7) $3 + 0 = \underline{3}$

8) $5 + 0 = \underline{5}$

9) $5 - 5 = \underline{0}$

10) $3 - 2 = \underline{1}$

11) $4 - 1 = \underline{3}$

12) $1 - 1 = \underline{0}$

13) $3 - 3 = \underline{0}$

14) $5 - 1 = \underline{4}$

15) $5 - 2 = \underline{3}$

16) $5 - 4 = \underline{1}$

Câu trả lời

1. 5

2. 4

3. 5

4. 3

5. 3

6. 4

7. 3

8. 5

9. 0

10. 1

11. 3

12. 0

13. 0

14. 4

15. 3


16. 1




Giải các câu hỏi.

Câu trả lời


1) $4 + 1 = \underline{\quad}$




2) $4 + 0 = \underline{\quad}$




3) $3 + 2 = \underline{\quad}$




4) $2 + 1 = \underline{\quad}$




5) $1 + 2 = \underline{\quad}$




6) $1 + 3 = \underline{\quad}$




7) $3 + 0 = \underline{\quad}$




8) $5 + 0 = \underline{\quad}$




9) $5 - 5 = \underline{\quad}$




10) $3 - 2 = \underline{\quad}$




11) $4 - 1 = \underline{\quad}$




12) $1 - 1 = \underline{\quad}$



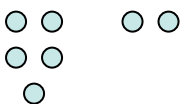
13) $3 - 3 = \underline{\quad}$



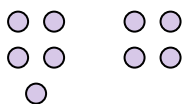
14) $5 - 1 = \underline{\quad}$



15) $5 - 2 = \underline{\quad}$



16) $5 - 4 = \underline{\quad}$



1. _____
2. _____
3. _____
4. _____
5. _____
6. _____
7. _____
8. _____
9. _____
10. _____
11. _____
12. _____
13. _____
14. _____
15. _____
16. _____