



Giải các câu hỏi.

**Câu trả lời**

1)  $1 + 1 = \underline{\quad}$

2)  $2 + 1 = \underline{\quad}$

3)  $1 + 4 = \underline{\quad}$

4)  $3 + 0 = \underline{\quad}$

5)  $3 + 2 = \underline{\quad}$

6)  $4 + 0 = \underline{\quad}$

7)  $1 + 2 = \underline{\quad}$

8)  $5 + 0 = \underline{\quad}$

9)  $5 - 2 = \underline{\quad}$

10)  $4 - 4 = \underline{\quad}$

11)  $5 - 5 = \underline{\quad}$

12)  $2 - 2 = \underline{\quad}$

13)  $3 - 3 = \underline{\quad}$

14)  $4 - 2 = \underline{\quad}$

15)  $5 - 3 = \underline{\quad}$

16)  $2 - 1 = \underline{\quad}$

1. \_\_\_\_\_

2. \_\_\_\_\_

3. \_\_\_\_\_

4. \_\_\_\_\_

5. \_\_\_\_\_

6. \_\_\_\_\_

7. \_\_\_\_\_

8. \_\_\_\_\_

9. \_\_\_\_\_

10. \_\_\_\_\_

11. \_\_\_\_\_

12. \_\_\_\_\_

13. \_\_\_\_\_

14. \_\_\_\_\_

15. \_\_\_\_\_

16. \_\_\_\_\_



Giải các câu hỏi.

**Câu trả lời**

1)  $1 + 1 = \underline{2}$

2)  $2 + 1 = \underline{3}$

1. 2

3)  $1 + 4 = \underline{5}$

4)  $3 + 0 = \underline{3}$

2. 3

5)  $3 + 2 = \underline{5}$

6)  $4 + 0 = \underline{4}$

3. 5

7)  $1 + 2 = \underline{3}$

8)  $5 + 0 = \underline{5}$

4. 3

9)  $5 - 2 = \underline{3}$

10)  $4 - 4 = \underline{0}$

5. 5

11)  $5 - 5 = \underline{0}$

12)  $2 - 2 = \underline{0}$

6. 4

13)  $3 - 3 = \underline{0}$

14)  $4 - 2 = \underline{2}$

7. 3

15)  $5 - 3 = \underline{2}$

16)  $2 - 1 = \underline{1}$

8. 5

9. 3

10. 0

11. 0

12. 0

13. 0

14. 2

15. 2

16. 1



**Giải các câu hỏi.**

**Câu trả lời**

1) 1 + 1 = \_\_\_\_\_  
 +

2) 2 + 1 = \_\_\_\_\_  
 +

3) 1 + 4 = \_\_\_\_\_  
 +

4) 3 + 0 = \_\_\_\_\_

5) 3 + 2 = \_\_\_\_\_  
 +

6) 4 + 0 = \_\_\_\_\_

7) 1 + 2 = \_\_\_\_\_  
 +

8) 5 + 0 = \_\_\_\_\_

9) 5 - 2 = \_\_\_\_\_  
 -

10) 4 - 4 = \_\_\_\_\_  
 -

11) 5 - 5 = \_\_\_\_\_  
 -

12) 2 - 2 = \_\_\_\_\_  
 -

13) 3 - 3 = \_\_\_\_\_  
 -

14) 4 - 2 = \_\_\_\_\_  
 -

15) 5 - 3 = \_\_\_\_\_  
 -

16) 2 - 1 = \_\_\_\_\_  
 -

1. \_\_\_\_\_
2. \_\_\_\_\_
3. \_\_\_\_\_
4. \_\_\_\_\_
5. \_\_\_\_\_
6. \_\_\_\_\_
7. \_\_\_\_\_
8. \_\_\_\_\_
9. \_\_\_\_\_
10. \_\_\_\_\_
11. \_\_\_\_\_
12. \_\_\_\_\_
13. \_\_\_\_\_
14. \_\_\_\_\_
15. \_\_\_\_\_
16. \_\_\_\_\_



Giải các câu hỏi.

1)  $5 + 0 = \underline{\quad}$

2)  $4 + 0 = \underline{\quad}$

3)  $2 + 0 = \underline{\quad}$

4)  $1 + 1 = \underline{\quad}$

5)  $4 + 1 = \underline{\quad}$

6)  $1 + 4 = \underline{\quad}$

7)  $1 + 2 = \underline{\quad}$

8)  $2 + 3 = \underline{\quad}$

9)  $4 - 4 = \underline{\quad}$

10)  $5 - 5 = \underline{\quad}$

11)  $2 - 2 = \underline{\quad}$

12)  $5 - 3 = \underline{\quad}$

13)  $5 - 4 = \underline{\quad}$

14)  $3 - 3 = \underline{\quad}$

15)  $4 - 1 = \underline{\quad}$

16)  $3 - 2 = \underline{\quad}$

**Câu trả lời**

1. \_\_\_\_\_

2. \_\_\_\_\_

3. \_\_\_\_\_

4. \_\_\_\_\_

5. \_\_\_\_\_

6. \_\_\_\_\_

7. \_\_\_\_\_

8. \_\_\_\_\_

9. \_\_\_\_\_

10. \_\_\_\_\_

11. \_\_\_\_\_

12. \_\_\_\_\_

13. \_\_\_\_\_

14. \_\_\_\_\_

15. \_\_\_\_\_

16. \_\_\_\_\_



Giải các câu hỏi.

**Câu trả lời**

1)  $5 + 0 = \underline{5}$

2)  $4 + 0 = \underline{4}$

1. 5

3)  $2 + 0 = \underline{2}$

4)  $1 + 1 = \underline{2}$

2. 4

3. 2

5)  $4 + 1 = \underline{5}$

6)  $1 + 4 = \underline{5}$

4. 2

5. 5

7)  $1 + 2 = \underline{3}$

8)  $2 + 3 = \underline{5}$

6. 5

7. 3

9)  $4 - 4 = \underline{0}$

10)  $5 - 5 = \underline{0}$

8. 5

9. 0

10. 0

11)  $2 - 2 = \underline{0}$

12)  $5 - 3 = \underline{2}$

11. 0

12. 2

13)  $5 - 4 = \underline{1}$

14)  $3 - 3 = \underline{0}$

13. 1

14. 0

15. 3

15)  $4 - 1 = \underline{3}$

16)  $3 - 2 = \underline{1}$


16. 1




**Giải các câu hỏi.**

**Câu trả lời**


1)  $5 + 0 = \underline{\quad}$





2)  $4 + 0 = \underline{\quad}$





3)  $2 + 0 = \underline{\quad}$





4)  $1 + 1 = \underline{\quad}$



5)  $4 + 1 = \underline{\quad}$



6)  $1 + 4 = \underline{\quad}$



7)  $1 + 2 = \underline{\quad}$



8)  $2 + 3 = \underline{\quad}$



9)  $4 - 4 = \underline{\quad}$



10)  $5 - 5 = \underline{\quad}$



11)  $2 - 2 = \underline{\quad}$



12)  $5 - 3 = \underline{\quad}$



13)  $5 - 4 = \underline{\quad}$



14)  $3 - 3 = \underline{\quad}$

15)  $4 - 1 = \underline{\quad}$

16)  $3 - 2 = \underline{\quad}$

1. \_\_\_\_\_
2. \_\_\_\_\_
3. \_\_\_\_\_
4. \_\_\_\_\_
5. \_\_\_\_\_
6. \_\_\_\_\_
7. \_\_\_\_\_
8. \_\_\_\_\_
9. \_\_\_\_\_
10. \_\_\_\_\_
11. \_\_\_\_\_
12. \_\_\_\_\_
13. \_\_\_\_\_
14. \_\_\_\_\_
15. \_\_\_\_\_
16. \_\_\_\_\_



Giải các câu hỏi.

1)  $3 + 2 = \underline{\quad}$

2)  $5 + 0 = \underline{\quad}$

3)  $2 + 1 = \underline{\quad}$

4)  $2 + 3 = \underline{\quad}$

5)  $1 + 2 = \underline{\quad}$

6)  $3 + 0 = \underline{\quad}$

7)  $4 + 0 = \underline{\quad}$

8)  $2 + 0 = \underline{\quad}$

9)  $1 - 1 = \underline{\quad}$

10)  $5 - 4 = \underline{\quad}$

11)  $5 - 5 = \underline{\quad}$

12)  $3 - 1 = \underline{\quad}$

13)  $2 - 2 = \underline{\quad}$

14)  $4 - 4 = \underline{\quad}$

15)  $5 - 2 = \underline{\quad}$

16)  $5 - 1 = \underline{\quad}$

**Câu trả lời**

1. \_\_\_\_\_

2. \_\_\_\_\_

3. \_\_\_\_\_

4. \_\_\_\_\_

5. \_\_\_\_\_

6. \_\_\_\_\_

7. \_\_\_\_\_

8. \_\_\_\_\_

9. \_\_\_\_\_

10. \_\_\_\_\_

11. \_\_\_\_\_

12. \_\_\_\_\_

13. \_\_\_\_\_

14. \_\_\_\_\_

15. \_\_\_\_\_

16. \_\_\_\_\_



Giải các câu hỏi.

**Câu trả lời**

1)  $3 + 2 = \underline{5}$

2)  $5 + 0 = \underline{5}$

1. 5

3)  $2 + 1 = \underline{3}$

4)  $2 + 3 = \underline{5}$

2. 5

5)  $1 + 2 = \underline{3}$

6)  $3 + 0 = \underline{3}$

3. 3

4. 5

5. 3

7)  $4 + 0 = \underline{4}$

8)  $2 + 0 = \underline{2}$

6. 3

7. 4

9)  $1 - 1 = \underline{0}$

10)  $5 - 4 = \underline{1}$

8. 2

9. 0

10. 1

11)  $5 - 5 = \underline{0}$

12)  $3 - 1 = \underline{2}$

11. 0

12. 2

13)  $2 - 2 = \underline{0}$

14)  $4 - 4 = \underline{0}$

13. 0

14. 0

15)  $5 - 2 = \underline{3}$

16)  $5 - 1 = \underline{4}$

15. 3

16. 4







**Giải các câu hỏi.**

**Câu trả lời**


1)  $3 + 2 = \underline{\quad}$




2)  $5 + 0 = \underline{\quad}$




3)  $2 + 1 = \underline{\quad}$




4)  $2 + 3 = \underline{\quad}$




5)  $1 + 2 = \underline{\quad}$




6)  $3 + 0 = \underline{\quad}$




7)  $4 + 0 = \underline{\quad}$



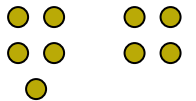
8)  $2 + 0 = \underline{\quad}$



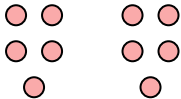
9)  $1 - 1 = \underline{\quad}$




10)  $5 - 4 = \underline{\quad}$




11)  $5 - 5 = \underline{\quad}$



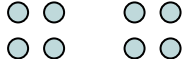
12)  $3 - 1 = \underline{\quad}$



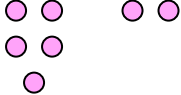
13)  $2 - 2 = \underline{\quad}$



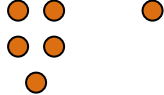
14)  $4 - 4 = \underline{\quad}$



15)  $5 - 2 = \underline{\quad}$



16)  $5 - 1 = \underline{\quad}$



1. \_\_\_\_\_
2. \_\_\_\_\_
3. \_\_\_\_\_
4. \_\_\_\_\_
5. \_\_\_\_\_
6. \_\_\_\_\_
7. \_\_\_\_\_
8. \_\_\_\_\_
9. \_\_\_\_\_
10. \_\_\_\_\_
11. \_\_\_\_\_
12. \_\_\_\_\_
13. \_\_\_\_\_
14. \_\_\_\_\_
15. \_\_\_\_\_
16. \_\_\_\_\_



Giải các câu hỏi.

1)  $2 + 1 = \underline{\quad}$

2)  $4 + 1 = \underline{\quad}$

3)  $2 + 0 = \underline{\quad}$

4)  $2 + 2 = \underline{\quad}$

5)  $1 + 1 = \underline{\quad}$

6)  $3 + 0 = \underline{\quad}$

7)  $3 + 2 = \underline{\quad}$

8)  $1 + 3 = \underline{\quad}$

9)  $3 - 2 = \underline{\quad}$

10)  $5 - 5 = \underline{\quad}$

11)  $5 - 4 = \underline{\quad}$

12)  $5 - 3 = \underline{\quad}$

13)  $4 - 4 = \underline{\quad}$

14)  $2 - 1 = \underline{\quad}$

15)  $3 - 1 = \underline{\quad}$

16)  $2 - 2 = \underline{\quad}$

**Câu trả lời**

1. \_\_\_\_\_

2. \_\_\_\_\_

3. \_\_\_\_\_

4. \_\_\_\_\_

5. \_\_\_\_\_

6. \_\_\_\_\_

7. \_\_\_\_\_

8. \_\_\_\_\_

9. \_\_\_\_\_

10. \_\_\_\_\_

11. \_\_\_\_\_

12. \_\_\_\_\_

13. \_\_\_\_\_

14. \_\_\_\_\_

15. \_\_\_\_\_

16. \_\_\_\_\_



Giải các câu hỏi.

1)  $2 + 1 = \underline{3}$

2)  $4 + 1 = \underline{5}$

3)  $2 + 0 = \underline{2}$

4)  $2 + 2 = \underline{4}$

5)  $1 + 1 = \underline{2}$

6)  $3 + 0 = \underline{3}$

7)  $3 + 2 = \underline{5}$

8)  $1 + 3 = \underline{4}$

9)  $3 - 2 = \underline{1}$

10)  $5 - 5 = \underline{0}$

11)  $5 - 4 = \underline{1}$

12)  $5 - 3 = \underline{2}$

13)  $4 - 4 = \underline{0}$

14)  $2 - 1 = \underline{1}$

15)  $3 - 1 = \underline{2}$

16)  $2 - 2 = \underline{0}$

**Câu trả lời**1. 32. 53. 24. 45. 26. 37. 58. 49. 110. 011. 112. 213. 014. 115. 216. 0



**Giải các câu hỏi.**

**Câu trả lời**

1)  $2 + 1 = \underline{\quad}$

2)  $4 + 1 = \underline{\quad}$

3)  $2 + 0 = \underline{\quad}$

4)  $2 + 2 = \underline{\quad}$

5)  $1 + 1 = \underline{\quad}$

6)  $3 + 0 = \underline{\quad}$

7)  $3 + 2 = \underline{\quad}$

8)  $1 + 3 = \underline{\quad}$

9)  $3 - 2 = \underline{\quad}$

10)  $5 - 5 = \underline{\quad}$

11)  $5 - 4 = \underline{\quad}$

12)  $5 - 3 = \underline{\quad}$

13)  $4 - 4 = \underline{\quad}$

14)  $2 - 1 = \underline{\quad}$

15)  $3 - 1 = \underline{\quad}$

16)  $2 - 2 = \underline{\quad}$

1. \_\_\_\_\_
2. \_\_\_\_\_
3. \_\_\_\_\_
4. \_\_\_\_\_
5. \_\_\_\_\_
6. \_\_\_\_\_
7. \_\_\_\_\_
8. \_\_\_\_\_
9. \_\_\_\_\_
10. \_\_\_\_\_
11. \_\_\_\_\_
12. \_\_\_\_\_
13. \_\_\_\_\_
14. \_\_\_\_\_
15. \_\_\_\_\_
16. \_\_\_\_\_



Giải các câu hỏi.

1)  $3 + 2 = \underline{\quad}$

2)  $5 + 0 = \underline{\quad}$

3)  $3 + 1 = \underline{\quad}$

4)  $3 + 0 = \underline{\quad}$

5)  $2 + 0 = \underline{\quad}$

6)  $4 + 0 = \underline{\quad}$

7)  $1 + 3 = \underline{\quad}$

8)  $1 + 4 = \underline{\quad}$

9)  $3 - 3 = \underline{\quad}$

10)  $4 - 3 = \underline{\quad}$

11)  $5 - 2 = \underline{\quad}$

12)  $4 - 1 = \underline{\quad}$

13)  $5 - 4 = \underline{\quad}$

14)  $5 - 3 = \underline{\quad}$

15)  $4 - 2 = \underline{\quad}$

16)  $3 - 2 = \underline{\quad}$

**Câu trả lời**

1. \_\_\_\_\_

2. \_\_\_\_\_

3. \_\_\_\_\_

4. \_\_\_\_\_

5. \_\_\_\_\_

6. \_\_\_\_\_

7. \_\_\_\_\_

8. \_\_\_\_\_

9. \_\_\_\_\_

10. \_\_\_\_\_

11. \_\_\_\_\_

12. \_\_\_\_\_

13. \_\_\_\_\_

14. \_\_\_\_\_

15. \_\_\_\_\_

16. \_\_\_\_\_



Giải các câu hỏi.

**Câu trả lời**

1)  $3 + 2 = \underline{5}$

2)  $5 + 0 = \underline{5}$

1. 5

3)  $3 + 1 = \underline{4}$

4)  $3 + 0 = \underline{3}$

2. 5

5)  $2 + 0 = \underline{2}$

6)  $4 + 0 = \underline{4}$

3. 4

4. 3

5. 2

6. 4

7. 4

7)  $1 + 3 = \underline{4}$

8)  $1 + 4 = \underline{5}$

8. 5

9. 0

9)  $3 - 3 = \underline{0}$

10)  $4 - 3 = \underline{1}$

10. 1

11. 3

12. 3

11)  $5 - 2 = \underline{3}$

12)  $4 - 1 = \underline{3}$

13. 1

14. 2

15. 2

13)  $5 - 4 = \underline{1}$

14)  $5 - 3 = \underline{2}$

16. 1

15)  $4 - 2 = \underline{2}$


16)  $3 - 2 = \underline{1}$



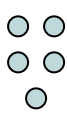
**Giải các câu hỏi.**

**Câu trả lời**


1)  $3 + 2 = \underline{\quad}$




2)  $5 + 0 = \underline{\quad}$




3)  $3 + 1 = \underline{\quad}$




4)  $3 + 0 = \underline{\quad}$




5)  $2 + 0 = \underline{\quad}$




6)  $4 + 0 = \underline{\quad}$



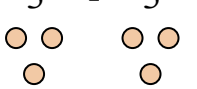
7)  $1 + 3 = \underline{\quad}$



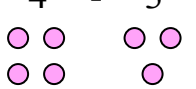
8)  $1 + 4 = \underline{\quad}$



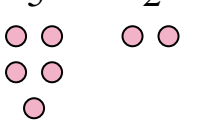
9)  $3 - 3 = \underline{\quad}$




10)  $4 - 3 = \underline{\quad}$



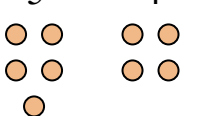
11)  $5 - 2 = \underline{\quad}$



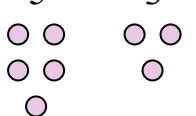
12)  $4 - 1 = \underline{\quad}$



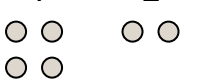
13)  $5 - 4 = \underline{\quad}$




14)  $5 - 3 = \underline{\quad}$



15)  $4 - 2 = \underline{\quad}$



16)  $3 - 2 = \underline{\quad}$



1. \_\_\_\_\_
2. \_\_\_\_\_
3. \_\_\_\_\_
4. \_\_\_\_\_
5. \_\_\_\_\_
6. \_\_\_\_\_
7. \_\_\_\_\_
8. \_\_\_\_\_
9. \_\_\_\_\_
10. \_\_\_\_\_
11. \_\_\_\_\_
12. \_\_\_\_\_
13. \_\_\_\_\_
14. \_\_\_\_\_
15. \_\_\_\_\_
16. \_\_\_\_\_



Giải các câu hỏi.

1)  $2 + 2 = \underline{\quad}$

2)  $5 + 0 = \underline{\quad}$

3)  $3 + 0 = \underline{\quad}$

4)  $1 + 1 = \underline{\quad}$

5)  $4 + 1 = \underline{\quad}$

6)  $2 + 3 = \underline{\quad}$

7)  $1 + 4 = \underline{\quad}$

8)  $1 + 3 = \underline{\quad}$

9)  $5 - 5 = \underline{\quad}$

10)  $5 - 1 = \underline{\quad}$

11)  $5 - 4 = \underline{\quad}$

12)  $5 - 3 = \underline{\quad}$

13)  $5 - 2 = \underline{\quad}$

14)  $4 - 4 = \underline{\quad}$

15)  $3 - 3 = \underline{\quad}$

16)  $3 - 1 = \underline{\quad}$

**Câu trả lời**

1. \_\_\_\_\_

2. \_\_\_\_\_

3. \_\_\_\_\_

4. \_\_\_\_\_

5. \_\_\_\_\_

6. \_\_\_\_\_

7. \_\_\_\_\_

8. \_\_\_\_\_

9. \_\_\_\_\_

10. \_\_\_\_\_

11. \_\_\_\_\_

12. \_\_\_\_\_

13. \_\_\_\_\_

14. \_\_\_\_\_

15. \_\_\_\_\_

16. \_\_\_\_\_





Giải các câu hỏi.

1)  $2 + 2 = \underline{4}$

2)  $5 + 0 = \underline{5}$

3)  $3 + 0 = \underline{3}$

4)  $1 + 1 = \underline{2}$

5)  $4 + 1 = \underline{5}$

6)  $2 + 3 = \underline{5}$

7)  $1 + 4 = \underline{5}$

8)  $1 + 3 = \underline{4}$

9)  $5 - 5 = \underline{0}$

10)  $5 - 1 = \underline{4}$

11)  $5 - 4 = \underline{1}$

12)  $5 - 3 = \underline{2}$

13)  $5 - 2 = \underline{3}$

14)  $4 - 4 = \underline{0}$

15)  $3 - 3 = \underline{0}$

16)  $3 - 1 = \underline{2}$

**Câu trả lời**

1. 4

2. 5

3. 3

4. 2

5. 5

6. 5

7. 5

8. 4

9. 0

10. 4

11. 1

12. 2

13. 3

14. 0



15. 0

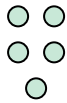
16. 2






**Giải các câu hỏi.**



**Câu trả lời**



1)  $2 + 2 = \underline{\quad}$   
  $+$  



2)  $5 + 0 = \underline{\quad}$   




3)  $3 + 0 = \underline{\quad}$   


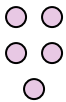

4)  $1 + 1 = \underline{\quad}$   
  $+$  

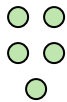

5)  $4 + 1 = \underline{\quad}$   
  $+$  



6)  $2 + 3 = \underline{\quad}$   
  $+$  



7)  $1 + 4 = \underline{\quad}$   
  $+$  



8)  $1 + 3 = \underline{\quad}$   
  $+$  



9)  $5 - 5 = \underline{\quad}$   
  $-$  



10)  $5 - 1 = \underline{\quad}$   
  $-$  



11)  $5 - 4 = \underline{\quad}$   
  $-$  

12)  $5 - 3 = \underline{\quad}$   
  $-$  

13)  $5 - 2 = \underline{\quad}$   
  $-$  

14)  $4 - 4 = \underline{\quad}$   
  $-$  

15)  $3 - 3 = \underline{\quad}$   
  $-$  

16)  $3 - 1 = \underline{\quad}$   
  $-$  

1. \_\_\_\_\_
2. \_\_\_\_\_
3. \_\_\_\_\_
4. \_\_\_\_\_
5. \_\_\_\_\_
6. \_\_\_\_\_
7. \_\_\_\_\_
8. \_\_\_\_\_
9. \_\_\_\_\_
10. \_\_\_\_\_
11. \_\_\_\_\_
12. \_\_\_\_\_
13. \_\_\_\_\_
14. \_\_\_\_\_
15. \_\_\_\_\_
16. \_\_\_\_\_



Giải các câu hỏi.

**Câu trả lời**

1)  $4 + 0 = \underline{\quad}$

2)  $5 + 0 = \underline{\quad}$

3)  $4 + 1 = \underline{\quad}$

4)  $2 + 2 = \underline{\quad}$

5)  $1 + 2 = \underline{\quad}$

6)  $3 + 1 = \underline{\quad}$

7)  $1 + 0 = \underline{\quad}$

8)  $1 + 1 = \underline{\quad}$

9)  $3 - 2 = \underline{\quad}$

10)  $4 - 1 = \underline{\quad}$

11)  $5 - 5 = \underline{\quad}$

12)  $2 - 1 = \underline{\quad}$

13)  $5 - 4 = \underline{\quad}$

14)  $5 - 1 = \underline{\quad}$

15)  $4 - 3 = \underline{\quad}$

16)  $4 - 4 = \underline{\quad}$

1. \_\_\_\_\_
2. \_\_\_\_\_
3. \_\_\_\_\_
4. \_\_\_\_\_
5. \_\_\_\_\_
6. \_\_\_\_\_
7. \_\_\_\_\_
8. \_\_\_\_\_
9. \_\_\_\_\_
10. \_\_\_\_\_
11. \_\_\_\_\_
12. \_\_\_\_\_
13. \_\_\_\_\_
14. \_\_\_\_\_
15. \_\_\_\_\_
16. \_\_\_\_\_



Giải các câu hỏi.

1)  $4 + 0 = \underline{4}$

2)  $5 + 0 = \underline{5}$

3)  $4 + 1 = \underline{5}$

4)  $2 + 2 = \underline{4}$

5)  $1 + 2 = \underline{3}$

6)  $3 + 1 = \underline{4}$

7)  $1 + 0 = \underline{1}$

8)  $1 + 1 = \underline{2}$

9)  $3 - 2 = \underline{1}$

10)  $4 - 1 = \underline{3}$

11)  $5 - 5 = \underline{0}$

12)  $2 - 1 = \underline{1}$

13)  $5 - 4 = \underline{1}$

14)  $5 - 1 = \underline{4}$

15)  $4 - 3 = \underline{1}$


16)  $4 - 4 = \underline{0}$


**Câu trả lời**1. 42. 53. 54. 45. 36. 47. 18. 29. 110. 311. 012. 113. 114. 415. 116. 0





**Giải các câu hỏi.**


**Câu trả lời**


1)  $4 + 0 = \underline{\quad}$   



2)  $5 + 0 = \underline{\quad}$   



3)  $4 + 1 = \underline{\quad}$   



4)  $2 + 2 = \underline{\quad}$   



5)  $1 + 2 = \underline{\quad}$   


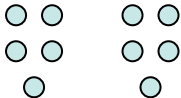
6)  $3 + 1 = \underline{\quad}$   



7)  $1 + 0 = \underline{\quad}$   


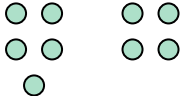
8)  $1 + 1 = \underline{\quad}$   



9)  $3 - 2 = \underline{\quad}$   



10)  $4 - 1 = \underline{\quad}$   



11)  $5 - 5 = \underline{\quad}$   


12)  $2 - 1 = \underline{\quad}$   


13)  $5 - 4 = \underline{\quad}$   


14)  $5 - 1 = \underline{\quad}$   


15)  $4 - 3 = \underline{\quad}$   


16)  $4 - 4 = \underline{\quad}$   


1. \_\_\_\_\_
2. \_\_\_\_\_
3. \_\_\_\_\_
4. \_\_\_\_\_
5. \_\_\_\_\_
6. \_\_\_\_\_
7. \_\_\_\_\_
8. \_\_\_\_\_
9. \_\_\_\_\_
10. \_\_\_\_\_
11. \_\_\_\_\_
12. \_\_\_\_\_
13. \_\_\_\_\_
14. \_\_\_\_\_
15. \_\_\_\_\_
16. \_\_\_\_\_



Giải các câu hỏi.

1)  $2 + 2 = \underline{\quad}$

2)  $3 + 2 = \underline{\quad}$

3)  $5 + 0 = \underline{\quad}$

4)  $4 + 1 = \underline{\quad}$

5)  $1 + 3 = \underline{\quad}$

6)  $2 + 3 = \underline{\quad}$

7)  $2 + 1 = \underline{\quad}$

8)  $3 + 1 = \underline{\quad}$

9)  $4 - 3 = \underline{\quad}$

10)  $5 - 5 = \underline{\quad}$

11)  $4 - 4 = \underline{\quad}$

12)  $3 - 3 = \underline{\quad}$

13)  $5 - 4 = \underline{\quad}$

14)  $5 - 2 = \underline{\quad}$

15)  $4 - 2 = \underline{\quad}$

16)  $3 - 2 = \underline{\quad}$

**Câu trả lời**

1. \_\_\_\_\_

2. \_\_\_\_\_

3. \_\_\_\_\_

4. \_\_\_\_\_

5. \_\_\_\_\_

6. \_\_\_\_\_

7. \_\_\_\_\_

8. \_\_\_\_\_

9. \_\_\_\_\_

10. \_\_\_\_\_

11. \_\_\_\_\_

12. \_\_\_\_\_

13. \_\_\_\_\_

14. \_\_\_\_\_

15. \_\_\_\_\_

16. \_\_\_\_\_



Giải các câu hỏi.

**Câu trả lời**

1)  $2 + 2 = \underline{4}$

2)  $3 + 2 = \underline{5}$

1. 4

3)  $5 + 0 = \underline{5}$

4)  $4 + 1 = \underline{5}$

2. 5

5)  $1 + 3 = \underline{4}$

6)  $2 + 3 = \underline{5}$

3. 5

4. 5

5. 4

6. 5

7)  $2 + 1 = \underline{3}$

8)  $3 + 1 = \underline{4}$

7. 3

8. 4

9)  $4 - 3 = \underline{1}$

10)  $5 - 5 = \underline{0}$

9. 1

10. 0

11. 0

12. 0

11)  $4 - 4 = \underline{0}$

12)  $3 - 3 = \underline{0}$

13. 1

14. 3

13)  $5 - 4 = \underline{1}$

14)  $5 - 2 = \underline{3}$

15. 2

16. 1


15)  $4 - 2 = \underline{2}$


16)  $3 - 2 = \underline{1}$

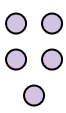



**Giải các câu hỏi.**


**Câu trả lời**

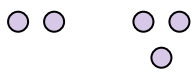
1)  $2 + 2 = \underline{\quad}$   



2)  $3 + 2 = \underline{\quad}$   



3)  $5 + 0 = \underline{\quad}$   



4)  $4 + 1 = \underline{\quad}$   


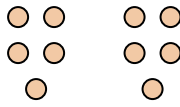
5)  $1 + 3 = \underline{\quad}$   



6)  $2 + 3 = \underline{\quad}$   



7)  $2 + 1 = \underline{\quad}$   


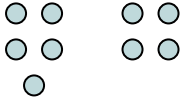
8)  $3 + 1 = \underline{\quad}$   


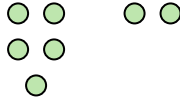
9)  $4 - 3 = \underline{\quad}$   



10)  $5 - 5 = \underline{\quad}$   



11)  $4 - 4 = \underline{\quad}$   


12)  $3 - 3 = \underline{\quad}$   


13)  $5 - 4 = \underline{\quad}$   


14)  $5 - 2 = \underline{\quad}$   


15)  $4 - 2 = \underline{\quad}$   


16)  $3 - 2 = \underline{\quad}$   


1. \_\_\_\_\_
2. \_\_\_\_\_
3. \_\_\_\_\_
4. \_\_\_\_\_
5. \_\_\_\_\_
6. \_\_\_\_\_
7. \_\_\_\_\_
8. \_\_\_\_\_
9. \_\_\_\_\_
10. \_\_\_\_\_
11. \_\_\_\_\_
12. \_\_\_\_\_
13. \_\_\_\_\_
14. \_\_\_\_\_
15. \_\_\_\_\_
16. \_\_\_\_\_





Giải các câu hỏi.

1)  $4 + 1 = \underline{\quad}$

2)  $1 + 3 = \underline{\quad}$

3)  $3 + 2 = \underline{\quad}$

4)  $4 + 0 = \underline{\quad}$

5)  $1 + 2 = \underline{\quad}$

6)  $5 + 0 = \underline{\quad}$

7)  $2 + 2 = \underline{\quad}$

8)  $2 + 0 = \underline{\quad}$

9)  $5 - 4 = \underline{\quad}$

10)  $5 - 5 = \underline{\quad}$

11)  $4 - 2 = \underline{\quad}$

12)  $4 - 3 = \underline{\quad}$

13)  $3 - 2 = \underline{\quad}$

14)  $1 - 1 = \underline{\quad}$

15)  $3 - 1 = \underline{\quad}$

16)  $5 - 2 = \underline{\quad}$

**Câu trả lời**

1. \_\_\_\_\_

2. \_\_\_\_\_

3. \_\_\_\_\_

4. \_\_\_\_\_

5. \_\_\_\_\_

6. \_\_\_\_\_

7. \_\_\_\_\_

8. \_\_\_\_\_

9. \_\_\_\_\_

10. \_\_\_\_\_

11. \_\_\_\_\_

12. \_\_\_\_\_

13. \_\_\_\_\_

14. \_\_\_\_\_

15. \_\_\_\_\_

16. \_\_\_\_\_



Giải các câu hỏi.

1)  $4 + 1 = \underline{5}$

2)  $1 + 3 = \underline{4}$

3)  $3 + 2 = \underline{5}$

4)  $4 + 0 = \underline{4}$

5)  $1 + 2 = \underline{3}$

6)  $5 + 0 = \underline{5}$

7)  $2 + 2 = \underline{4}$

8)  $2 + 0 = \underline{2}$

9)  $5 - 4 = \underline{1}$

10)  $5 - 5 = \underline{0}$

11)  $4 - 2 = \underline{2}$

12)  $4 - 3 = \underline{1}$

13)  $3 - 2 = \underline{1}$

14)  $1 - 1 = \underline{0}$

15)  $3 - 1 = \underline{2}$

16)  $5 - 2 = \underline{3}$

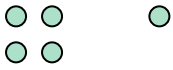
**Câu trả lời**1. 52. 43. 54. 45. 36. 57. 48. 29. 110. 011. 212. 113. 114. 015. 216. 3




**Giải các câu hỏi.**

**Câu trả lời**


1)  $4 + 1 = \underline{\quad}$




2)  $1 + 3 = \underline{\quad}$




3)  $3 + 2 = \underline{\quad}$



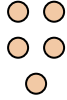
4)  $4 + 0 = \underline{\quad}$




5)  $1 + 2 = \underline{\quad}$




6)  $5 + 0 = \underline{\quad}$



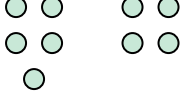
7)  $2 + 2 = \underline{\quad}$



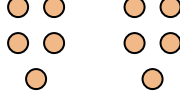
8)  $2 + 0 = \underline{\quad}$




9)  $5 - 4 = \underline{\quad}$




10)  $5 - 5 = \underline{\quad}$




11)  $4 - 2 = \underline{\quad}$




12)  $4 - 3 = \underline{\quad}$




13)  $3 - 2 = \underline{\quad}$




14)  $1 - 1 = \underline{\quad}$



15)  $3 - 1 = \underline{\quad}$



16)  $5 - 2 = \underline{\quad}$



1. \_\_\_\_\_
2. \_\_\_\_\_
3. \_\_\_\_\_
4. \_\_\_\_\_
5. \_\_\_\_\_
6. \_\_\_\_\_
7. \_\_\_\_\_
8. \_\_\_\_\_
9. \_\_\_\_\_
10. \_\_\_\_\_
11. \_\_\_\_\_
12. \_\_\_\_\_
13. \_\_\_\_\_
14. \_\_\_\_\_
15. \_\_\_\_\_
16. \_\_\_\_\_



Giải các câu hỏi.

1)  $4 + 1 = \underline{\quad}$

2)  $2 + 2 = \underline{\quad}$

3)  $2 + 3 = \underline{\quad}$

4)  $3 + 2 = \underline{\quad}$

5)  $1 + 4 = \underline{\quad}$

6)  $5 + 0 = \underline{\quad}$

7)  $1 + 3 = \underline{\quad}$

8)  $3 + 1 = \underline{\quad}$

9)  $5 - 3 = \underline{\quad}$

10)  $5 - 5 = \underline{\quad}$

11)  $5 - 4 = \underline{\quad}$

12)  $4 - 4 = \underline{\quad}$

13)  $2 - 1 = \underline{\quad}$

14)  $4 - 2 = \underline{\quad}$

15)  $3 - 1 = \underline{\quad}$

16)  $4 - 3 = \underline{\quad}$

**Câu trả lời**

1. \_\_\_\_\_

2. \_\_\_\_\_

3. \_\_\_\_\_

4. \_\_\_\_\_

5. \_\_\_\_\_

6. \_\_\_\_\_

7. \_\_\_\_\_

8. \_\_\_\_\_

9. \_\_\_\_\_

10. \_\_\_\_\_

11. \_\_\_\_\_

12. \_\_\_\_\_

13. \_\_\_\_\_

14. \_\_\_\_\_

15. \_\_\_\_\_

16. \_\_\_\_\_



Giải các câu hỏi.

1)  $4 + 1 = \underline{5}$

2)  $2 + 2 = \underline{4}$

3)  $2 + 3 = \underline{5}$

4)  $3 + 2 = \underline{5}$

5)  $1 + 4 = \underline{5}$

6)  $5 + 0 = \underline{5}$

7)  $1 + 3 = \underline{4}$

8)  $3 + 1 = \underline{4}$

9)  $5 - 3 = \underline{2}$

10)  $5 - 5 = \underline{0}$

11)  $5 - 4 = \underline{1}$

12)  $4 - 4 = \underline{0}$

13)  $2 - 1 = \underline{1}$

14)  $4 - 2 = \underline{2}$

15)  $3 - 1 = \underline{2}$

16)  $4 - 3 = \underline{1}$


**Câu trả lời**1. 52. 43. 54. 55. 56. 57. 48. 49. 210. 011. 112. 013. 114. 215. 216. 1




**Giải các câu hỏi.**

**Câu trả lời**


1)  $4 + 1 = \underline{\quad}$




2)  $2 + 2 = \underline{\quad}$




3)  $2 + 3 = \underline{\quad}$




4)  $3 + 2 = \underline{\quad}$




5)  $1 + 4 = \underline{\quad}$




6)  $5 + 0 = \underline{\quad}$



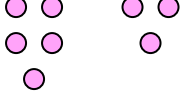
7)  $1 + 3 = \underline{\quad}$



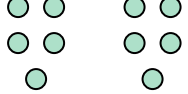
8)  $3 + 1 = \underline{\quad}$



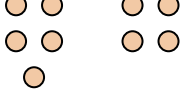
9)  $5 - 3 = \underline{\quad}$




10)  $5 - 5 = \underline{\quad}$




11)  $5 - 4 = \underline{\quad}$




12)  $4 - 4 = \underline{\quad}$




13)  $2 - 1 = \underline{\quad}$




14)  $4 - 2 = \underline{\quad}$



15)  $3 - 1 = \underline{\quad}$



16)  $4 - 3 = \underline{\quad}$



1. \_\_\_\_\_
2. \_\_\_\_\_
3. \_\_\_\_\_
4. \_\_\_\_\_
5. \_\_\_\_\_
6. \_\_\_\_\_
7. \_\_\_\_\_
8. \_\_\_\_\_
9. \_\_\_\_\_
10. \_\_\_\_\_
11. \_\_\_\_\_
12. \_\_\_\_\_
13. \_\_\_\_\_
14. \_\_\_\_\_
15. \_\_\_\_\_
16. \_\_\_\_\_