



Giải các câu hỏi.

1) $4 + 0 = \underline{\quad}$

2) $5 + 0 = \underline{\quad}$

3) $4 + 1 = \underline{\quad}$

4) $2 + 2 = \underline{\quad}$

5) $1 + 2 = \underline{\quad}$

6) $3 + 1 = \underline{\quad}$

7) $1 + 0 = \underline{\quad}$

8) $1 + 1 = \underline{\quad}$

9) $3 - 2 = \underline{\quad}$

10) $4 - 1 = \underline{\quad}$

11) $5 - 5 = \underline{\quad}$

12) $2 - 1 = \underline{\quad}$

13) $5 - 4 = \underline{\quad}$

14) $5 - 1 = \underline{\quad}$

15) $4 - 3 = \underline{\quad}$

16) $4 - 4 = \underline{\quad}$

Câu trả lời

1. _____

2. _____

3. _____

4. _____

5. _____

6. _____

7. _____

8. _____

9. _____

10. _____

11. _____

12. _____

13. _____

14. _____

15. _____

16. _____



Giải các câu hỏi.

1) $4 + 0 = \underline{4}$

2) $5 + 0 = \underline{5}$

3) $4 + 1 = \underline{5}$

4) $2 + 2 = \underline{4}$

5) $1 + 2 = \underline{3}$

6) $3 + 1 = \underline{4}$

7) $1 + 0 = \underline{1}$

8) $1 + 1 = \underline{2}$

9) $3 - 2 = \underline{1}$

10) $4 - 1 = \underline{3}$

11) $5 - 5 = \underline{0}$

12) $2 - 1 = \underline{1}$

13) $5 - 4 = \underline{1}$

14) $5 - 1 = \underline{4}$

15) $4 - 3 = \underline{1}$

16) $4 - 4 = \underline{0}$

Câu trả lời

1. 4

2. 5

3. 5

4. 4

5. 3

6. 4

7. 1

8. 2

9. 1

10. 3

11. 0

12. 1

13. 1

14. 4


15. 1


16. 0





Giải các câu hỏi.


Câu trả lời


1) $4 + 0 = \underline{\quad}$



2) $5 + 0 = \underline{\quad}$



3) $4 + 1 = \underline{\quad}$



4) $2 + 2 = \underline{\quad}$



5) $1 + 2 = \underline{\quad}$


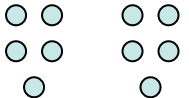
6) $3 + 1 = \underline{\quad}$



7) $1 + 0 = \underline{\quad}$


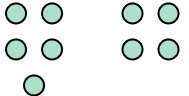
8) $1 + 1 = \underline{\quad}$



9) $3 - 2 = \underline{\quad}$



10) $4 - 1 = \underline{\quad}$



11) $5 - 5 = \underline{\quad}$


12) $2 - 1 = \underline{\quad}$


13) $5 - 4 = \underline{\quad}$


14) $5 - 1 = \underline{\quad}$


15) $4 - 3 = \underline{\quad}$


16) $4 - 4 = \underline{\quad}$


1. _____

2. _____

3. _____

4. _____

5. _____

6. _____

7. _____

8. _____

9. _____

10. _____

11. _____

12. _____

13. _____

14. _____

15. _____

16. _____