



Giải các câu hỏi.

Câu trả lời

1) $3 + 2 = \underline{\quad}$

2) $5 + 0 = \underline{\quad}$

3) $2 + 1 = \underline{\quad}$

4) $2 + 3 = \underline{\quad}$

5) $1 + 2 = \underline{\quad}$

6) $3 + 0 = \underline{\quad}$

7) $4 + 0 = \underline{\quad}$

8) $2 + 0 = \underline{\quad}$

9) $1 - 1 = \underline{\quad}$

10) $5 - 4 = \underline{\quad}$

11) $5 - 5 = \underline{\quad}$

12) $3 - 1 = \underline{\quad}$

13) $2 - 2 = \underline{\quad}$

14) $4 - 4 = \underline{\quad}$

15) $5 - 2 = \underline{\quad}$

16) $5 - 1 = \underline{\quad}$

1. _____

2. _____

3. _____

4. _____

5. _____

6. _____

7. _____

8. _____

9. _____

10. _____

11. _____

12. _____

13. _____

14. _____

15. _____

16. _____



Giải các câu hỏi.

1) $3 + 2 = \underline{5}$

2) $5 + 0 = \underline{5}$

3) $2 + 1 = \underline{3}$

4) $2 + 3 = \underline{5}$

5) $1 + 2 = \underline{3}$

6) $3 + 0 = \underline{3}$

7) $4 + 0 = \underline{4}$

8) $2 + 0 = \underline{2}$

9) $1 - 1 = \underline{0}$

10) $5 - 4 = \underline{1}$

11) $5 - 5 = \underline{0}$

12) $3 - 1 = \underline{2}$

13) $2 - 2 = \underline{0}$

14) $4 - 4 = \underline{0}$

15) $5 - 2 = \underline{3}$

16) $5 - 1 = \underline{4}$

Câu trả lời

1. 5

2. 5

3. 3

4. 5

5. 3

6. 3

7. 4

8. 2

9. 0

10. 1

11. 0

12. 2

13. 0

14. 0


15. 3


16. 4





Giải các câu hỏi.


Câu trả lời


1) $3 + 2 = \underline{\quad}$



2) $5 + 0 = \underline{\quad}$



3) $2 + 1 = \underline{\quad}$



4) $2 + 3 = \underline{\quad}$


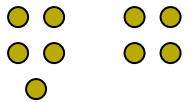
5) $1 + 2 = \underline{\quad}$


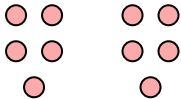
6) $3 + 0 = \underline{\quad}$



7) $4 + 0 = \underline{\quad}$



8) $2 + 0 = \underline{\quad}$


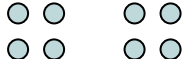
9) $1 - 1 = \underline{\quad}$


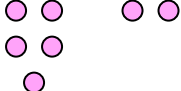
10) $5 - 4 = \underline{\quad}$


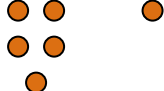
11) $5 - 5 = \underline{\quad}$


12) $3 - 1 = \underline{\quad}$


13) $2 - 2 = \underline{\quad}$


14) $4 - 4 = \underline{\quad}$


15) $5 - 2 = \underline{\quad}$


16) $5 - 1 = \underline{\quad}$


1. _____
2. _____
3. _____
4. _____
5. _____
6. _____
7. _____
8. _____
9. _____
10. _____
11. _____
12. _____
13. _____
14. _____
15. _____
16. _____